




Comparing Fractions

Circle the smallest fraction.




$$\frac{1}{2}$$



$$\frac{1}{9}$$



$$\frac{1}{7}$$



$$\frac{1}{2}$$



$$\frac{1}{9}$$




$$\frac{1}{4}$$




$$\frac{1}{3}$$



$$\frac{1}{5}$$



$$\frac{1}{3}$$



$$\frac{1}{2}$$



$$\frac{1}{8}$$



$$\frac{1}{9}$$